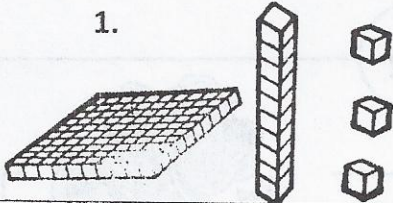
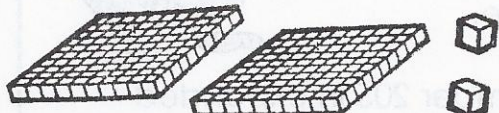
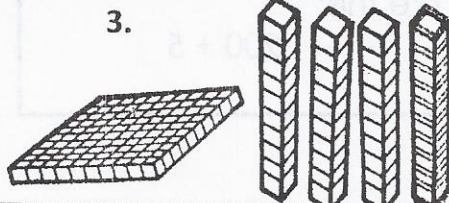
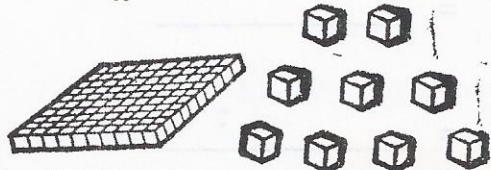


Use the place value blocks to write the number in **standard form** and **expanded form**.

1.		_____ Standard form
		_____ Expanded form
2.		_____ Standard form
		_____ Expanded form
3.		_____ Standard form
		_____ Expanded form
4.		_____ Standard form
		_____ Expanded form

Write the number in **expanded form** and **draw the place value blocks** in the box.

5. 260

\_\_\_\_\_ Expanded Form

6. 108

\_\_\_\_\_ Expanded Form

Write the number in **standard form** and **draw the place value blocks** in the box.

7.  $300 + 40 + 3$

\_\_\_\_\_ Standard Form

8.  $100 + 5$

\_\_\_\_\_ Standard Form